

Midterm Spring 2015

107 Points Total

Version 1

1. (2 Points) In order to declare a named constant, the declaration must use which Java keyword?
 - a. final
 - b. int
 - c. static
 - d. void

2. (2 Points) Suppose c1 and c2 are objects of the class Circle. A Circle has a single data member, its radius. The Circle class has a default constructor (implemented correctly), but no other methods have been defined in the implementation of the Circle class. What will happen when we try to execute this code?
Circle c1 = new Circle(12.0);
Circle c2 = new Circle(12.0);
boolean same = (c1.equals(c2));
 - a. The code will not compile because equals() has not been implemented in Circle.
 - b. The value of same will be true.
 - c. The value of same will be false.

3. (2 Points) The Java expression $9 / 5 + 9 \% 5$ equals _____.
 - a. 0
 - b. 1
 - c. 3
 - d. 5
 - e. 6

4. (2 Points) Which of the following is a base case for a recursive binary search algorithm? (first is the index of the first item in the array, last is the index of the last item in the array, and mid is the midpoint of the array).
 - a. last > first
 - b. first > last
 - c. 0 <= first
 - d. last <= SIZE-1

5. (2 Points) In the following list:
John, Kate, Fred, Mark, Jon, Adam, Drew
which element is the head of the list?
 - a. John
 - b. Mark
 - c. Drew
 - d. Adam

6. (2 Points) Which of the following statements deletes the node that curr references?
 - a. prev.setNext(curr);
 - b. curr.setNext(prev);
 - c. curr.setNext(curr.getNext());
 - d. prev.setNext(curr.getNext());

7. (20 Points) Given the following StackInterface:

```
public interface StackInterface {
    public void push(Object obj);
    public Object pop();
}
```

And given the following array-based implementation:

```
public class ArrayStack implements StackInterface {

    private final int MAX_STACK = 1000;
    private final int INVALID_STACK_POINTER = -1;

    private Integer[] arrayStack = new Object[MAX_STACK];
    private int stackPointer = INVALID_STACK_POINTER;

    @Override
    public void push(Integer obj) {
        if (++stackPointer > MAX_STACK) {
            arrayStack[stackPointer] = obj;
        }
    }

    @Override
    public Object pop() {
        Object obj = null;
        if (stackPointer == INVALID_STACK_POINTER) {
            obj = arrayStack[stackPointer];
        }
        return null;
    }
}
```

Re-write the ArrayStack class and fix all syntax and logical errors.

Midterm Spring 2015

107 Points Total

Version 1

8. (30 Points) Given the following QueueInterface and Node implementation:

```
public interface QueueInterface {  
    public void add(Object obj);  
    public Object remove();  
}
```

```
public class Node {  
    private Object object;  
    private Node next;  
  
    public Node(Object object) {  
        this.object = object;  
        this.next = null;  
    }  
  
    public Node getNext() {  
        return next;  
    }  
  
    public void setNext(Node next) {  
        this.next = next;  
    }  
  
    public Object getObject() {  
        return object;  
    }  
}
```

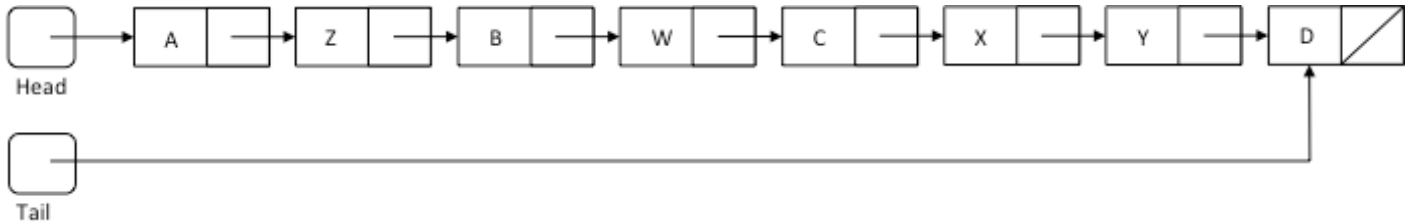
Write the complete Java class for the reference-based ReferenceQueue that implements the given QueueInterface.

9. (25 Points) Write a Java method:

```
public static void sort(int[] numbers) {
```

which sorts the `numbers` array using Bubble Sort. Make your method as efficient as possible.

10. (20 Points) Given the following list:



And the following method:

```

public void doStuff() {
    Node prevNode = head;
    Node curNode = head.getNext();

    while (curNode != null) {
        prevNode.setNext(curNode.getNext());
        curNode.setNext(head);
        head = curNode;

        curNode = prevNode.getNext();
    }
    tail = prevNode;
}
  
```

Draw the list after `doStuff()` has finished executing.

Midterm Spring 2015

107 Points Total

Version 2

1. (2 Points) If x is a variable of type `int`, what is the largest possible value of the expression $(x \% 5)$?
 - a. 1
 - b. 4
 - c. 5
 - d. $2^{31} - 1$

2. (2 Points) Which type of loop is guaranteed to execute its body at least once?
 - a. do-while
 - b. for
 - c. switch
 - d. while

3. (2 Points) If we wanted to write an if-statement that executes whenever the real number x is between 10.0 and 20.0, how should the test condition be written?
 - a) $10.0 < x \parallel x > 20.0$
 - b) $10.0 < x \ \&\& \ x > 20.0$
 - c) $10.0 < x \ \&\& \ x < 20.0$
 - d) $10.0 < x \parallel x < 20.0$

4. (2 Points) A recursive solution that finds the factorial of n generates _____ recursive calls.
 - a. $n-1$
 - b. n
 - c. $n+1$
 - d. $n*2$

5. (2 Points) In the following list:
John, Kate, Fred, Mark, Jon, Adam, Drew
which element is the tail of the list?
 - a. John
 - b. Mark
 - c. Drew
 - d. Adam

6. (2 Points) If a linked list is empty, the statement `head.getNext()` will throw a(n) _____.
 - a. `IllegalAccessException`
 - b. `ArithmeticException`
 - c. `IndexOutOfBoundsException`
 - d. `NullPointerException`

7. (20 Points) Given the following StackInterface:

```
public interface StackInterface {
    public void push(Object obj);
    public Object pop();
}
```

And given the following reference-based implementation:

```
public class Node {
    private Object object;
    private Node next;

    public Node(Object object) {
        this.object = object;
        this.next = null;
    }

    public Node getNext() {
        return next;
    }

    public void setNext(Node next) {
        this.next = next;
    }

    public Object getObject() {
        return object;
    }
}
```

```
public class ReferenceStack implements StackInterface {

    private Node stackPointer = null;

    @Override
    public void push(Integer obj) {
        Node newNode = new Node(obj);
        if (stackPointer != null) {
            stackPointer = newNode;
        } else {
            newNode.setNext(stackPointer);
            stackPointer = newNode;
        }
    }

    @Override
    public Object pop() {
        Object obj = null;
        if (stackPointer == null) {
            obj = stackPointer.getObject();
            stackPointer = stackPointer.getObject();
        }
        return null;
    }
}
```

Re-write the ReferenceStack class and fix all syntax and logical errors.

Midterm Spring 2015

107 Points Total

Version 2

8. (30 Points) Given the following QueueInterface:

```
public interface QueueInterface {  
    public void add(Object obj);  
    public Object remove();  
}
```

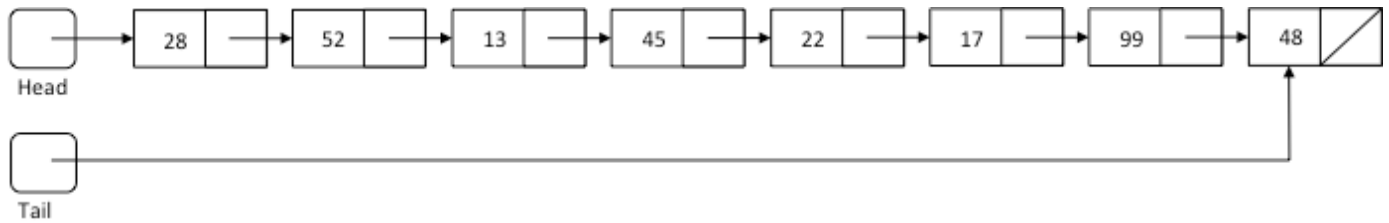
Write the complete Java class for the array-based ArrayQueue that implements the given QueueInterface. You may use the Vector class if you wish.

9. (25 Points) Write a Java method:

```
public static void sort(int[] numbers) {
```

which sorts the `numbers` array using Selection Sort. Make your method as efficient as possible.

10. (20 Points) Given the following list:



And the following method:

```
public void doStuff() {
    Node prevNode = head;
    Node curNode = head.getNext();

    while (curNode != null) {
        prevNode.setNext(curNode.getNext());
        curNode.setNext(head);
        head = curNode;

        curNode = prevNode.getNext();
    }
    tail = prevNode;
}
```

Draw the list after `doStuff()` has finished executing.

Midterm Spring 2015

107 Points Total

Version 3

1. (2 Points) Which of the following loop headers will arrange for the loop body to execute exactly 10 times?
 - a. `for (int i = 1; i < 10; ++i)`
 - b. `for (int i = 0; i <= 10; ++i)`
 - c. `for (int i = -5; i < 5; ++i)`
 - d. `for (int i = 2; i < 20; ++i)`

2. (2 Points) If `s1` is of type `String`, what does `s1.compareTo(s1)` return?
 - a. zero
 - b. true
 - c. false
 - d. Cannot be determined without knowing the value of `s1`.

3. (2 Points) Consider the following code that appears in a test class.

```
A a = new A();
int c = a.b;
```

In order for this code to work, which statement must be true?
 - a. `a` must be declared public inside class `A`
 - b. `b` must be declared public inside class `A`
 - c. `c` must be declared public inside class `A`
 - d. Method `b()` must return `int`

4. (2 Points) If the value being searched for by a recursive binary search algorithm is in the array, which of the following is true?
 - a. the algorithm cannot return a nonpositive number
 - b. the algorithm cannot return a nonnegative number
 - c. the algorithm cannot return a zero
 - d. the algorithm cannot return a negative number

5. (2 Points) In the following list:
John, Kate, Fred, Mark, Jon, Adam, Drew
which element does not have a predecessor?
 - a. John
 - b. Mark
 - c. Drew
 - d. Kate

6. (2 Points) Which of the following will be true when the reference variable `curr` references the last node in a linear linked list?
 - a. `curr == null`
 - b. `head == null`
 - c. `curr.getNext() == null`
 - d. `head.getNext() == null`

7. (20 Points) Given the following QueueInterface:

```
public interface QueueInterface {
    public void add(Object obj);
    public Object remove();
}
```

And given the following array-based implementation:

```
import java.util.Vector;

public class ArrayQueue implements QueueInteface {

    private Vector<E> arrayQueue = new Vector<E>();

    @Override
    public void add(Object obj) {
        arrayQueue.addElement(1, obj);
    }

    @Override
    public Object remove() {
        Object obj = null;
        if (arrayQueue.size() == 0) {
            obj = arrayQueue.elementAt(1);
            arrayQueue.remove(0);
        }
        return null;
    }
}
```

Re-write the ArrayQueue class and fix all syntax and logical errors.

Midterm Spring 2015

107 Points Total

Version 3

8. (30 Points) Given the following StackInterface and Node implementation:

```
public interface StackInterface {  
    public void push(Object obj);  
    public Object pop();  
}
```

```
public class Node {  
    private Object object;  
    private Node next;  
  
    public Node(Object object) {  
        this.object = object;  
        this.next = null;  
    }  
  
    public Node getNext() {  
        return next;  
    }  
  
    public void setNext(Node next) {  
        this.next = next;  
    }  
  
    public Object getObject() {  
        return object;  
    }  
}
```

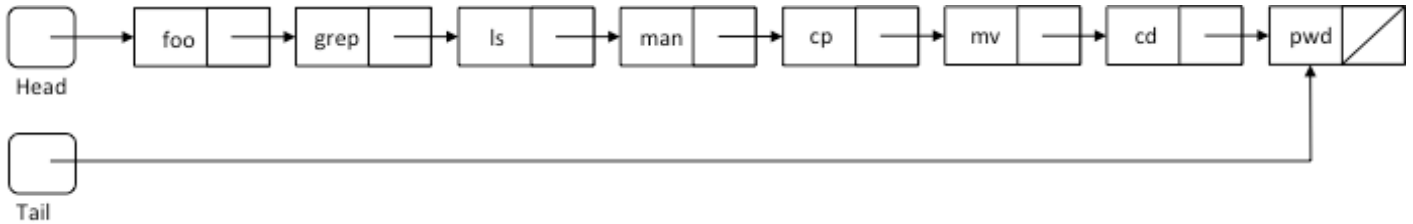
Write the complete Java class for the reference-based ReferenceStack that implements the given StackInterface.

9. (25 Points) Write a Java method:

```
public static void sort(int[] numbers) {
```

which sorts the `numbers` array using Bubble Sort. Make your method as efficient as possible.

10. (20 Points) Given the following list:



And the following method:

```
public void doStuff() {
    Node prevNode = head;
    Node curNode = head.getNext();

    while (curNode != null) {
        prevNode.setNext(curNode.getNext());
        curNode.setNext(head);
        head = curNode;

        curNode = prevNode.getNext();
    }
    tail = prevNode;
}
```

Draw the list after `doStuff()` has finished executing.

Midterm Spring 2015

107 Points Total

Version 4

1. (2 Points) What type of Java statement allows you to use classes contained in other packages?
 - a. an access statement
 - b. a class statement
 - c. an import statement
 - d. a package statement

2. (2 Points) How many constructors can a class have?
 - a. Exactly one
 - b. At least one but no more than three
 - c. Exactly the same as the number of data members
 - d. There is no restriction on the number of constructors

3. (2 Points) Which of these expressions is illegal in Java?
 - a. $x++ 5$
 - b. $x ==+ 5$
 - c. $x += 5$
 - d. $x == 5$

4. (2 Points) The midpoint of a sorted array can be found by _____, where first is the index of the first item in the array and last is the index of the last item in the array.
 - a. $\text{first} / 2 + \text{last} / 2$
 - b. $\text{first} / 2 - \text{last} / 2$
 - c. $(\text{first} + \text{last}) / 2$
 - d. $(\text{first} - \text{last}) / 2$

5. (2 Points) In the ADT list, when an item is deleted from position i of the list, _____.
 - a. the position of all items is decreased by 1
 - b. the position of each item that was at a position smaller than i is decreased by 1
 - c. the position of each item that was at a position greater than i is decreased by 1
 - d. the position of each item that was at a position smaller than i is increased by 1 while the position of each item that was at a position greater than i is decreased by 1

6. (2 Points) The last node of a linear linked list _____.
 - a. has the value null
 - b. has a next reference whose value is null
 - c. has a next reference which references the first node of the list
 - d. cannot store any data

Midterm Spring 2015

107 Points Total

Version 4

7. (20 Points) Given the following QueueInterface:

```
public interface QueueInterface {
    public void add(Object obj);
    public Object remove();
}
```

And given the following reference-based implementation:

```
public class Node {
    private Object object;
    private Node next;

    public Node(Object object) {
        this.object = object;
        this.next = null;
    }

    public Node getNext() {
        return next;
    }

    public void setNext(Node next) {
        this.next = next;
    }

    public Object getObject() {
        return object;
    }
}
```

```
public class ReferenceQueue implements QueueInterface {

    private Node front = null, back = null;

    @Override
    public void add(Object obj) {
        Node newNode = new Node(obj);
        if (back != null) {
            front = newNode;
            back = front;
        } else {
            back.setNext(newNode);
            back = newNode;
        }
    }

    @Override
    public Integer remove() {
        Object obj = null;
        if (front == null) {
            obj = front.getObject();
            front = front.getNext();
        }
        if (front != null) {
            back = null;
        }
        return null;
    }
}
```

Re-write the ReferenceQueue class and fix all syntax and logical errors.

8. (30 Points) Given the following StackInterface:

```
public interface StackInterface {  
    public void push(Object obj);  
    public Object pop();  
}
```

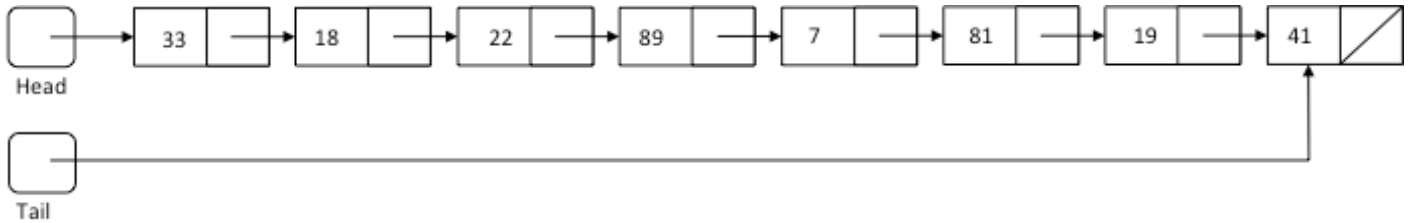
Write the complete Java class for the array-based ArrayStack that implements the given StackInterface. You may use the Vector class if you wish.

9. (25 Points) Write a Java method:

```
public static void sort(int[] numbers) {
```

which sorts the `numbers` array using Insertion Sort. Make your method as efficient as possible.

10. (20 Points) Given the following list:



And the following method:

```

public void doStuff() {
    Node prevNode = head;
    Node curNode = head.getNext();

    while (curNode != null) {
        prevNode.setNext(curNode.getNext());
        curNode.setNext(head);
        head = curNode;

        curNode = prevNode.getNext();
    }
    tail = prevNode;
}
  
```

Draw the list after `doStuff()` has finished executing.